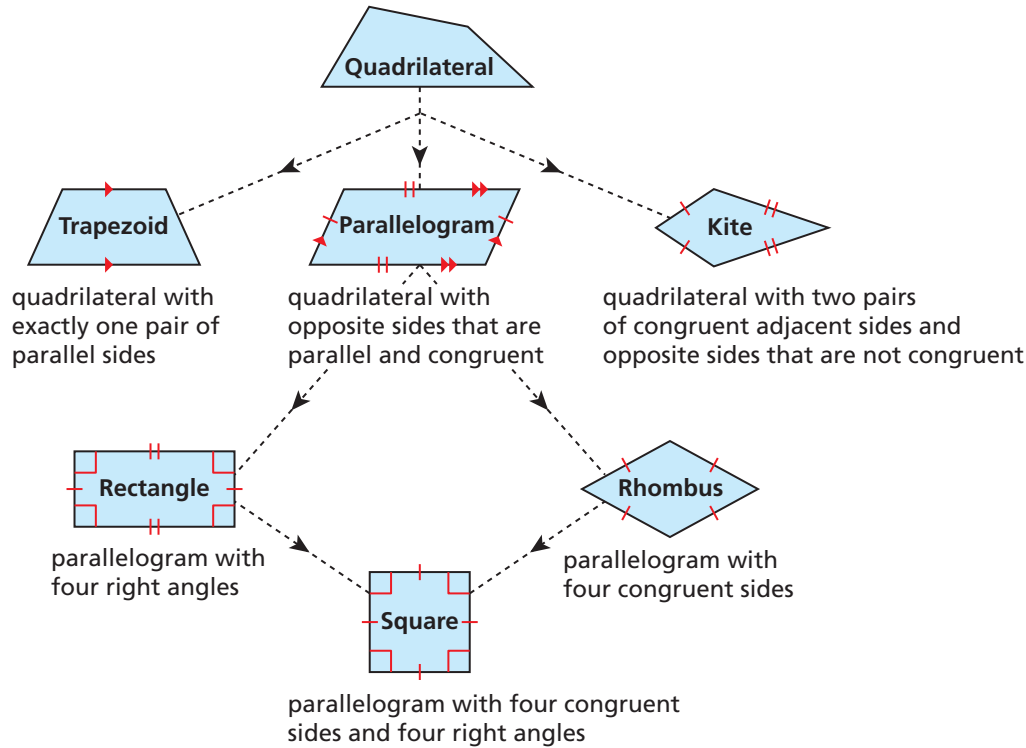
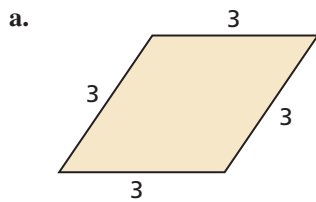


Classifying Quadrilaterals

A **quadrilateral** is a polygon with four sides. The diagram shows properties of different types of quadrilaterals and how they are related. When identifying a quadrilateral, use the name that is most specific.

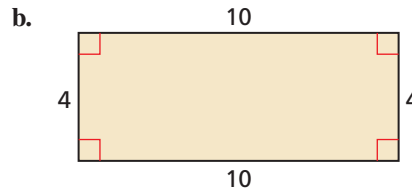


Example 1 Classify the quadrilateral.



The quadrilateral has four congruent sides.

▶ So, it is a rhombus.



The quadrilateral has four right angles.

▶ So, it is a rectangle.

Practice

Check your answers at BigIdeasMath.com.

Classify the quadrilateral.

