


REVIEW: Identifying Three-Dimensional Shapes


Name _____

Key Concept and Vocabulary

Cube




Sphere




Cone



Cylinder



Skill Examples

1.  The shape has a curved surface and no flat surfaces.

⋮ So, the shape is a sphere.

2.  The shape has a curved surface and one flat surface.

⋮ So, the shape is a cone.

Application Example

3. The glue stick has a curved surface and two flat surfaces.

⋮ So, the glue stick is a cylinder.




PRACTICE MAKES PURR-FECT®



Check your answers at BigIdeasMath.com.


Write the name of the shape.



_____ cube _____



_____ cone _____



_____ cylinder _____

7. **CRATE** Draw the shape of the flat surfaces of the cube. Count and write the number of flat surfaces.



_____ 6 _____ flat surfaces

