

Key Concept and Vocabulary

The sum S of the angle measures of a polygon with n sides is

$$S = (n - 2) \cdot 180^\circ.$$

Polygons



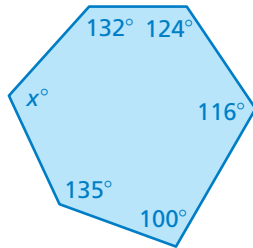
In a **regular polygon**, all of the sides are congruent and all of the angles are congruent.

Skill Examples

1. Find the sum of the angle measures of the polygon.

The polygon has 6 sides.

$$\begin{aligned} S &= (n - 2) \cdot 180^\circ \\ &= (6 - 2) \cdot 180^\circ \\ &= 4 \cdot 180^\circ \\ &= 720^\circ \end{aligned}$$



2. Find the value of x for the polygon in Exercise 1.

From Exercise 1, the sum of the angle measures is 720° . Write and solve an equation.

$$132 + 124 + 116 + 100 + 135 + x = 720$$

$$607 + x = 720$$

$$x = 113$$

The sum of the angle measures is 720° .

The value of x is 113.

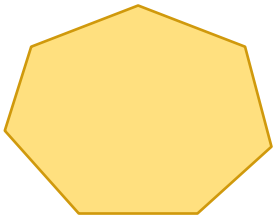


PRACTICE MAKES PURR-FECT®

Check your answers at BigIdeasMath.com.

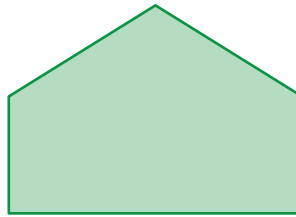
Find the sum of the angle measures of the polygon.

3.



$S =$ _____

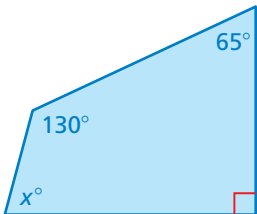
4.



$S =$ _____

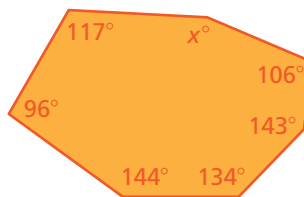
Find the value of x .

5.



$x =$ _____

6.



$x =$ _____

7. **LOGO** A company's logo is in the shape of a regular polygon. How many sides does the polygon have? What is the measure of each angle of the polygon? _____

