


REVIEW: Finding Perimeter Using Grids

Name _____

Key Concept and Vocabulary

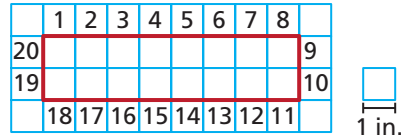


Perimeter



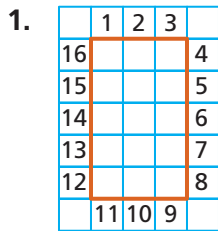
Perimeter is the distance around a figure.

Visual Model

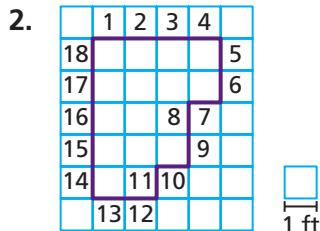


Perimeter = 20 inches

Skill Examples



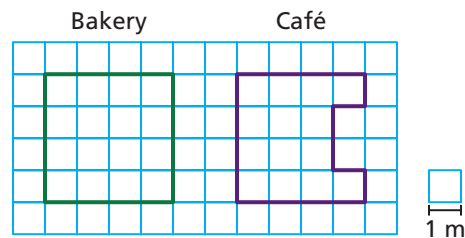
Perimeter = 16 meters



Perimeter = 18 feet

Application Example

3. Which patio has a greater perimeter?



16 meters < 18 meters

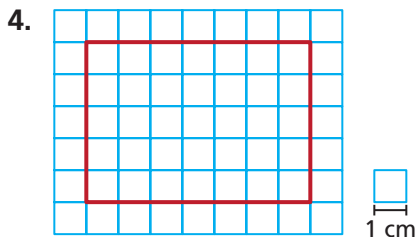
• The café's patio has a greater perimeter.

PRACTICE MAKES PURR-FECT®

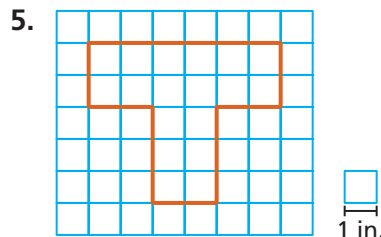


Check your answers at BigIdeasMath.com.

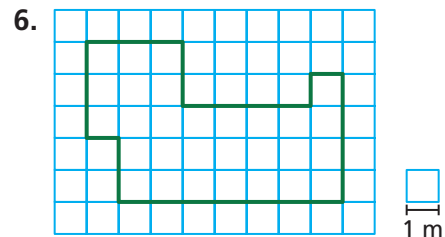
Find the perimeter of the figure.



Perimeter = 24 centimeters



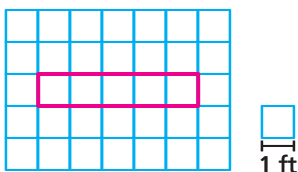
Perimeter = 22 inches



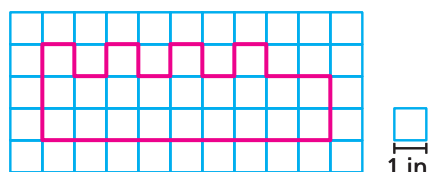
Perimeter = 28 meters

7. Draw a figure that has a perimeter of 12 feet. 8. Draw a figure that has a perimeter of 30 inches.

Sample answer:



Sample answer:



9. **GARDEN** Whose garden has a greater perimeter?

you

