

REVIEW: Identifying Two-Dimensional Shapes

Name _____

Key Concept and Vocabulary

Circle: 0 straight sides, 0 vertices


Triangle: 3 sides, 3 vertices

Quadrilateral: 4 sides, 4 vertices

Pentagon: 5 sides, 5 vertices


Hexagon: 6 sides, 6 vertices

Octagon: 8 sides, 8 vertices



Visual Models

Circle



Triangle



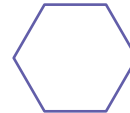
Quadrilateral



Pentagon



Hexagon

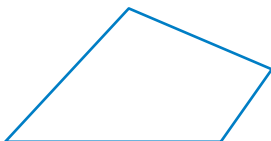


Octagon



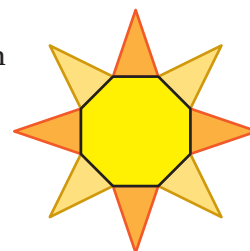
Skill Example

- The shape has 4 sides and 4 vertices. So, the shape is a quadrilateral.



Application Example

- The drawing of the sun is made using one octagon and eight triangles.



PRACTICE MAKES PURR-FECT®



Check your answers at BigIdeasMath.com.

Write the number of sides and vertices. Then write the name of the shape.

- _____ sides
_____ vertices

Shape: _____

- _____ sides
_____ vertices

Shape: _____

- HOUSE** Draw a quadrilateral to make a house. Draw a triangle to make the roof, a quadrilateral to make the door, and a circle to make a window.

- HOUSE** Your friend draws the house and the roof in Exercise 5 using one shape. What shape does your friend use? _____

