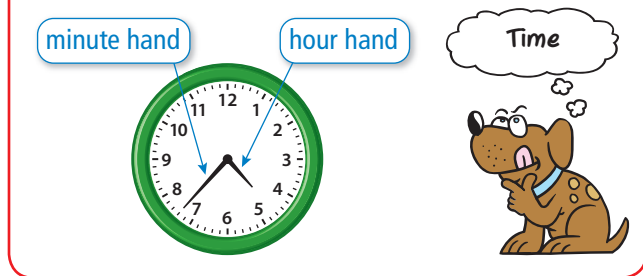


REVIEW: Telling Time to the Nearest Minute

Name _____

Key Concept and Vocabulary



Visual Model



It takes 1 minute for the minute hand to move from one mark to the next.

Skill Examples



Application Example

3. You eat lunch at 12 minutes after 11. Show and write the time you eat lunch.




- You eat lunch at 11:12.

PRACTICE MAKES PURR-FECT®




Check your answers at BigIdeasMath.com.

Write the time.



Draw to show the time.

7. 2:22



8. 11:51



9. 21 minutes before 5

