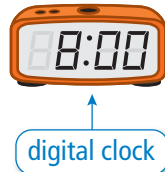
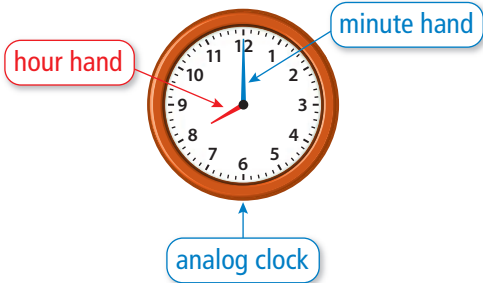


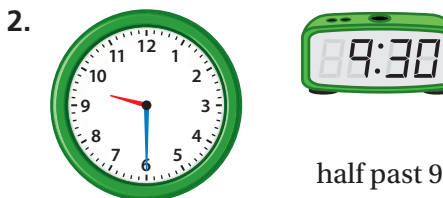
# REVIEW: Telling Time to the Hour and Half Hour

Name \_\_\_\_\_

## Key Concept and Vocabulary

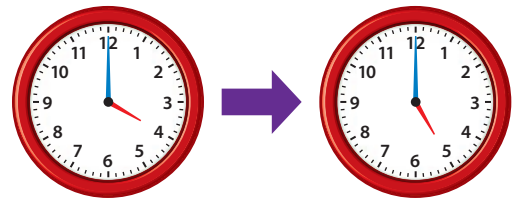


## Skill Examples



## Application Example

3. Basketball practice starts at 4 o'clock. It lasts an hour. At what time does basketball practice end?



An hour passes when the hour hand moves from one number to the next.

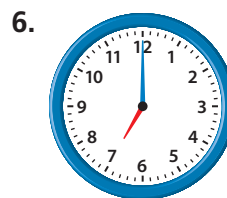
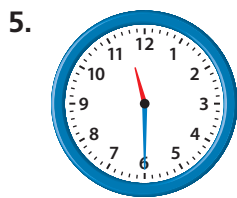
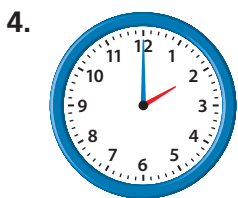
- ⋮ Basketball practice ends at 5 o'clock.

## PRACTICE MAKES PURR-FECT®



Check your answers at [BigIdeasMath.com](http://BigIdeasMath.com).

Write the time.



Draw to show the time.

7. half past 1



8. 10 o'clock



9. half past 6



10. **RECESS** Recess starts at 1 o'clock. It lasts a half hour. At what time does recess end? \_\_\_\_\_