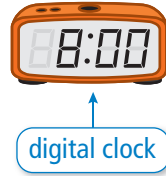
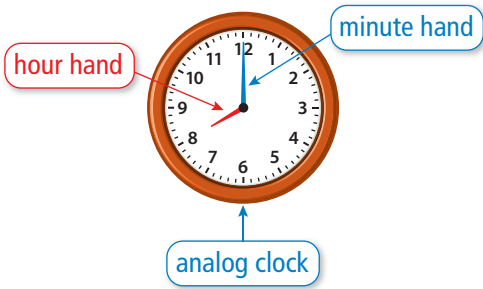


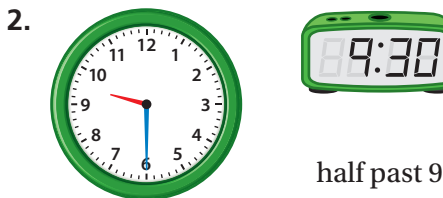
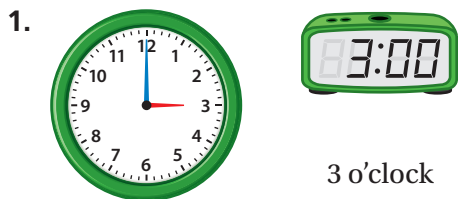
REVIEW: Telling Time to the Hour and Half Hour

Name _____

Key Concept and Vocabulary

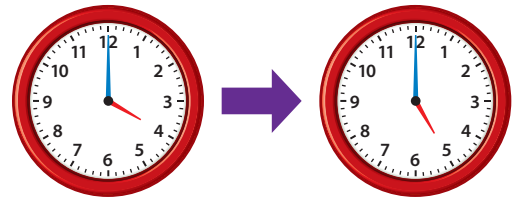


Skill Examples



Application Example

3. Basketball practice starts at 4 o'clock. It lasts an hour. At what time does basketball practice end?



An hour passes when the hour hand moves from one number to the next.

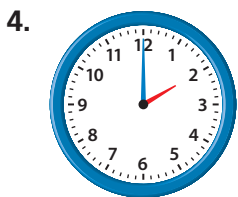
- ⋮ Basketball practice ends at 5 o'clock.

PRACTICE MAKES PURR-FECT®

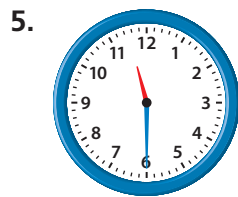


Check your answers at BigIdeasMath.com.

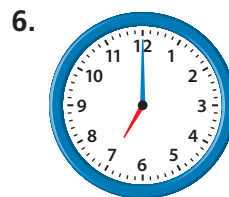
Write the time.



2 o'clock



half past 11



7 o'clock

Draw to show the time.

7. half past 1



8. 10 o'clock



9. half past 6



10. **RECESS** Recess starts at 1 o'clock. It lasts a half hour. At what time does recess end? half past 1