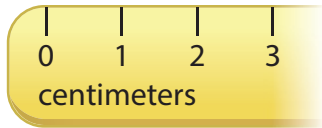


REVIEW: Metric Length

Name _____

Key Concept and Vocabulary

Two metric units of length are centimeters (cm) and meters (m).

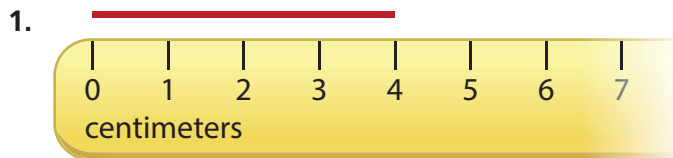


Visual Model



There are 100 centimeters in 1 meter.

Skill Example



••• The line is about 4 centimeters long.

Application Example

2. Measure the paper clip.



••• The paper clip is about 3 centimeters long.

PRACTICE MAKES PURR-FECT®



Check your answers at BigIdeasMath.com.

Measure the line.



about 8 centimeters




about 5 centimeters

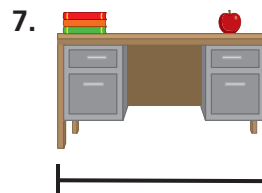


about 12 centimeters

Find and measure the object in your classroom.



about _____ centimeters



about _____ meters

8. **BASKETBALL COURT** Your friend says that the length of a basketball court is about 28. Is the basketball court about 28 centimeters long or about 28 meters long?

about 28 meters long