

REVIEW: Proportions

Name _____

Key Concept and Vocabulary

A **proportion** is an equation stating that the values of two ratios are equivalent.

$$\frac{2}{3} = \frac{4}{6}$$

Cross products are equal.

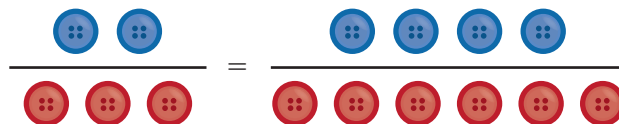
$$2 \cdot 6 = 3 \cdot 4$$

Proportions



Visual Model

The value of the ratio "2 to 3" is equal to the value of the ratio "4 to 6."



Skill Examples

1. 3 : 5 and 12 : 20 The ratios form a proportion

$$\frac{3}{5} = \frac{12}{20}$$

because the values of the ratios are equivalent.

2. 1 : 7 and 7 : 48

$$\frac{1}{7} \neq \frac{7}{48}$$

The ratios do *not* form a proportion because the values of the ratios are *not* equivalent.

Application Example

3. You spend \$5 for 3 tennis balls. Your friend spends \$6.25 for 4 tennis balls. Are the two rates proportional?

$$\frac{5}{3} \stackrel{?}{=} \frac{6.25}{4}$$

$$5(4) \neq 3(6.25)$$

The rates are *not* proportional.

PRACTICE MAKES PURR-FECT®

Check your answers at BigIdeasMath.com.

Decide whether the statement is a proportion.

4. $\frac{3}{7} \stackrel{?}{=} \frac{6}{14}$ _____

5. $\frac{1}{4} \stackrel{?}{=} \frac{4}{1}$ _____

6. $\frac{3}{2} \stackrel{?}{=} \frac{9}{4}$ _____

7. $\frac{1.25}{3} \stackrel{?}{=} \frac{5}{12}$ _____

8. $\frac{6}{18} \stackrel{?}{=} \frac{120}{360}$ _____

9. $\frac{4}{5} \stackrel{?}{=} \frac{4+4}{5+5}$ _____

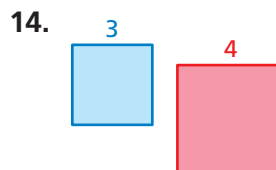
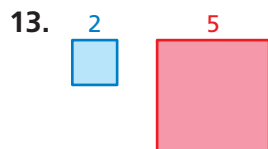
Complete the proportion.

10. $\frac{2}{5} = \frac{\square}{10}$

11. $\frac{1}{6} = \frac{4}{\square}$

12. $\frac{3}{\square} = \frac{9}{24}$

Write the proportion that compares the perimeters to the side lengths of the two squares.



15. **COMPARING RATES** You spend \$20 for 5 T-shirts. Your friend spends \$15 for 3 T-shirts. Are the two rates proportional? _____