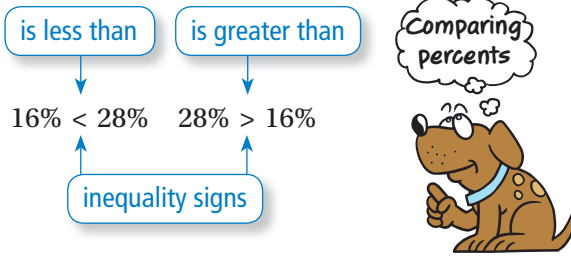


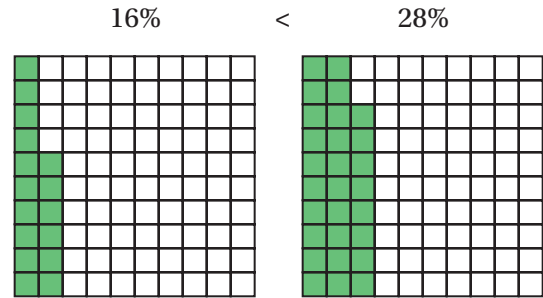
REVIEW: Comparing Percents

Name _____

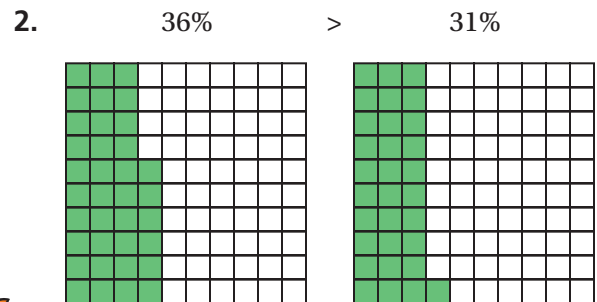
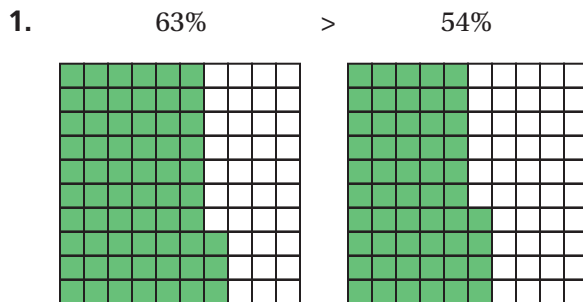
Key Concept and Vocabulary



Visual Model



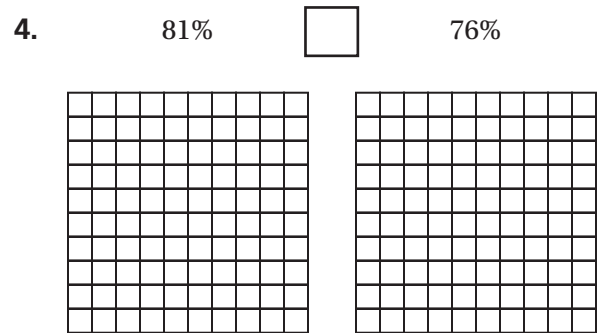
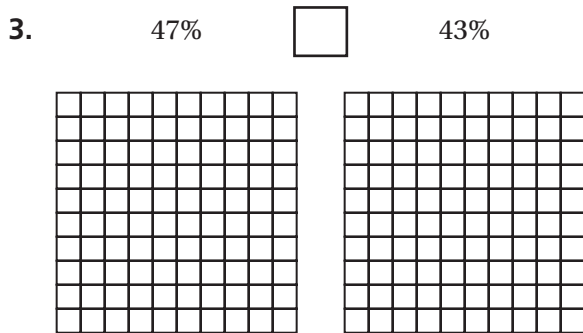
Skill Examples



PRACTICE MAKES PURR-FECT®

Check your answers at BigIdeasMath.com.

Shade the models to show the two percents. Then compare them using $<$, $>$, or $=$.



5. **FUNDRAISER** Two classrooms are having a fundraiser. After one week, Classroom A has raised 26% of its goal and Classroom B has raised 29% of its goal. Shade the models to show the two percents. Which classroom has raised a greater percentage of its goal?

