

REVIEW: Adding and Subtracting Decimals

Name _____

Key Concept and Vocabulary

$$\begin{array}{r} 5.70 \\ + 3.36 \\ \hline 9.06 \end{array}$$

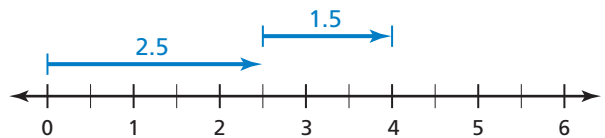
$$\begin{array}{r} 12.72 \\ - 3.84 \\ \hline 8.88 \end{array}$$

Lining up like place values also lines up the decimal points.

Adding and subtracting



Visual Model



$$2.5 + 1.5 = 4.0$$

Skill Examples

1.
$$\begin{array}{r} 134.12 \\ + 25.48 \\ \hline 159.60 \end{array}$$

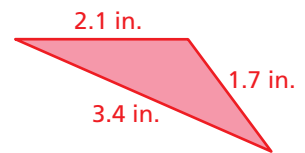
2.
$$\begin{array}{r} 0.13 \\ + 0.14 \\ \hline 0.27 \end{array}$$

3.
$$\begin{array}{r} 32.00 \\ - 9.45 \\ \hline 22.55 \end{array}$$

4.
$$\begin{array}{r} 1.40 \\ - 0.55 \\ \hline 0.85 \end{array}$$

Application Example

5. Find the perimeter of the triangle.



$$2.1 + 1.7 + 3.4 = 7.2$$

• The perimeter is 7.2 inches.



PRACTICE MAKES PURR-FECT®

Check your answers at BigIdeasMath.com.

Find the sum or difference.

6. $4.75 + 3.56 =$ _____

7. $9.00 - 1.50 =$ _____

8. $2.40 + 2.04 =$ _____

9. $112.50 + 24.52 =$ _____

10. $5.71 - 4.81 =$ _____

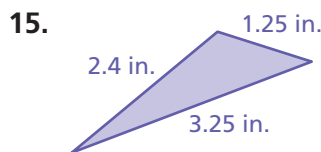
11. $20.7 - 12.5 =$ _____

12. $2.3 + 3.4 + 5.9 =$ _____

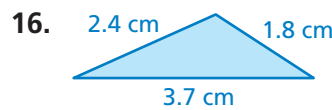
13. $3.4 + 5.6 - 2.3 =$ _____

14. $10.0 - (4.5 + 2.3) =$ _____

Find the perimeter of the triangle.



Perimeter = _____



Perimeter = _____

17. **SHOPPING** You take \$20 to the store. You buy a magazine for \$3.65 and a birthday card for \$5.29. How much money do you have left? _____

18. **NUMBER LINE** Show the sum graphically on the number line: $1.75 + 3.5$.

