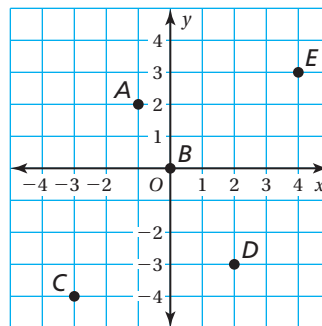
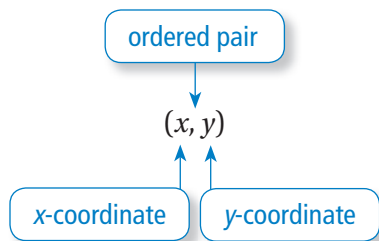


Key Concept and Vocabulary



Skill Examples

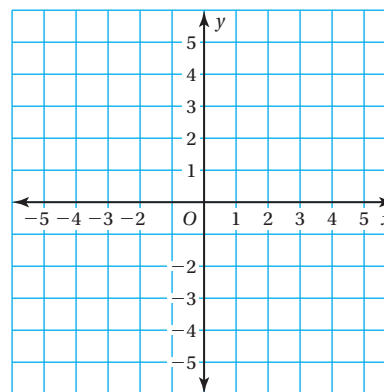
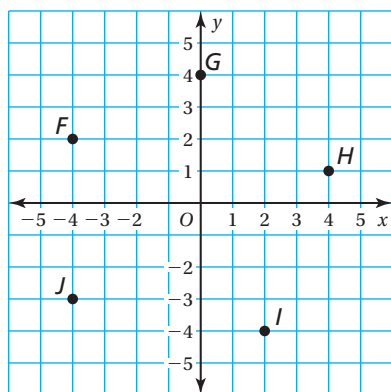
1. $A(-1, 2)$ (Quadrant II)
2. $B(0, 0)$ (origin)
3. $C(-3, -4)$ (Quadrant III)
4. $D(2, -3)$ (Quadrant IV)
5. $E(4, 3)$ (Quadrant I)



PRACTICE MAKES PURR-FECT®

Check your answers at BigIdeasMath.com.

Write the ordered pair corresponding to the point. Plot the ordered pair in the coordinate plane. Name the quadrant for the point.



6. F _____

7. G _____

8. H _____

9. I _____

10. J _____

11. $K(-3, 5)$ _____

12. $L(-3, 0)$ _____

13. $M(2, 5)$ _____

14. $N(4, -2)$ _____

15. $P(-2, -4)$ _____