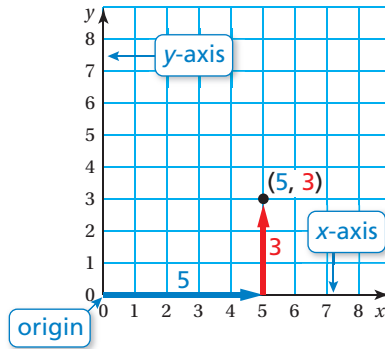
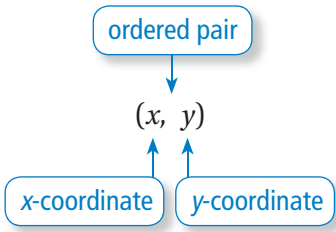


# REVIEW: The Coordinate Plane: First Quadrant

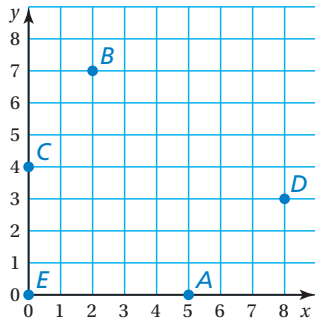
Name \_\_\_\_\_

## Key Concept and Vocabulary



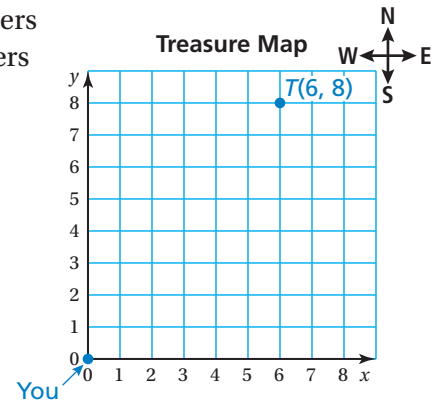
## Skill Examples

- $A(5, 0)$
- $B(2, 7)$
- $C(0, 4)$
- $D(8, 3)$
- $E(0, 0)$



## Application Example

- You walk 6 meters east and 8 meters north to find a treasure. Plot and label the location of the treasure on the map.

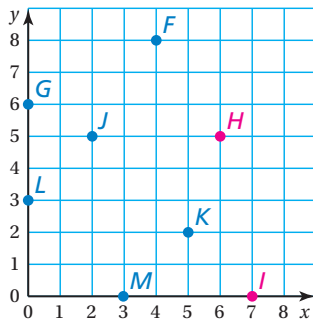


## PRACTICE MAKES PURR-FECT®



Check your answers at [BigIdeasMath.com](http://BigIdeasMath.com).

In Exercises 7–12, use the coordinate plane below.



Write the ordered pair corresponding to the point.

- Point  $F$  (4, 8)
- Point  $G$  (0, 6)

Plot and label the point in the coordinate plane.

- $H(6, 5)$
- $I(7, 0)$

Name the point for the ordered pair.

- $(5, 2)$  point K
- $(0, 3)$  point L

- WATERFALL** You hike 3 miles east and 4 miles north of your camping tent to find a waterfall. Plot and label the location of the waterfall on the map.

