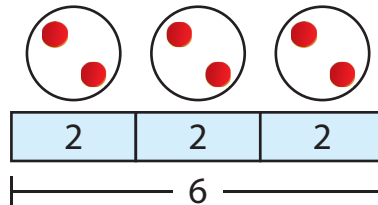
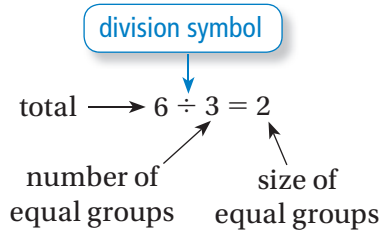
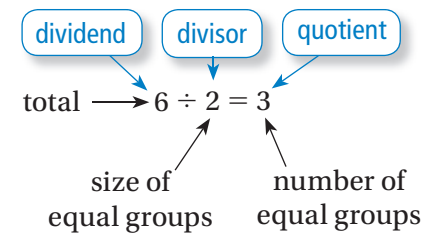


**Key Concept and Vocabulary**

Divide 6 counters into 3 equal groups.  
How many counters are in each group?

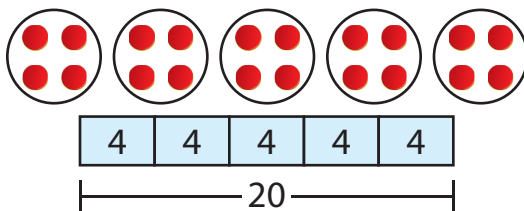


Divide 6 counters into groups of 2.  
How many groups are there?



**Skill Example**

- Divide 20 counters into 5 equal groups.  
How many counters are in each group?



$20 \div 5 = 4$

**Application Example**

- A football coach divides 42 players into groups of 7. How many groups are there?

$42 \div 7 = 6$

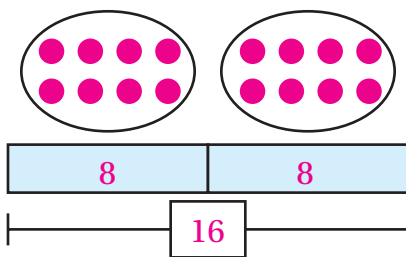
There are 6 groups.

**PRACTICE MAKES PURR-FECT®**



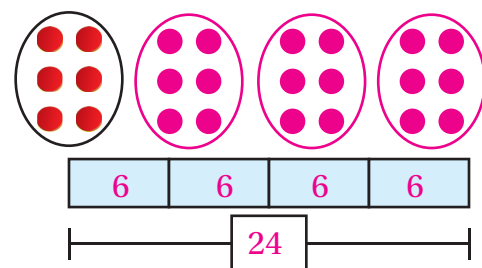
Check your answers at [BigIdeasMath.com](http://BigIdeasMath.com).

- Divide 16 counters into 2 equal groups.  
How many counters are in each group?



$16 \div 2 = \underline{8}$

- Divide 24 counters into groups of 6.  
How many groups are there?



$24 \div 6 = \underline{4}$

- FLOWERS** You have 27 flowers. You put an equal number of flowers in each of 3 vases. How many flowers are in each vase? 9 flowers
- SURFBOARDS** A beach shop owner puts 80 stickers on surfboards. She puts 8 stickers on each surfboard. How many surfboards are there? 10 surfboards