

REVIEW: Subtracting within 100


Name _____

Key Concept and Vocabulary

difference

$16 - 6 = 10$

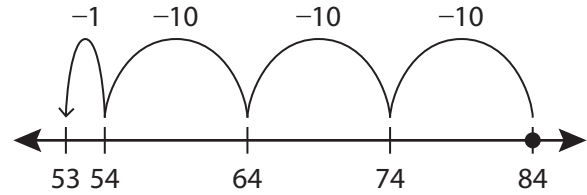
Subtract.



Visual Model

To subtract on a number line, move to the *left*.

$$84 - 31 = 53$$



Skill Examples

$$\begin{array}{r} 48 \\ - 13 \\ \hline 35 \end{array}$$

$$\begin{array}{r} 810 \\ \cancel{8} \cancel{0} \\ - 25 \\ \hline 65 \end{array}$$

$$\begin{array}{r} 514 \\ \cancel{5} \cancel{1} \\ - 38 \\ \hline 26 \end{array}$$

$$\begin{array}{r} 612 \\ \cancel{6} \cancel{1} \\ - 9 \\ \hline 63 \end{array}$$

Application Example

5. A water park has 22 water slides. You ride 16 of the slides. How many water slides do you have left to ride?

$$\begin{array}{r} 112 \\ \cancel{1} \cancel{1} \\ - 16 \\ \hline 6 \end{array}$$

••• You have 6 water slides left to ride.

PRACTICE MAKES PURR-FECT®



Check your answers at BigIdeasMath.com.

Find the difference.

$$\begin{array}{r} 6. \quad 54 \\ - 12 \\ \hline \end{array}$$

$$\begin{array}{r} 7. \quad 85 \\ - 36 \\ \hline \end{array}$$

$$\begin{array}{r} 8. \quad 73 \\ - 49 \\ \hline \end{array}$$

$$\begin{array}{r} 9. \quad 61 \\ - 27 \\ \hline \end{array}$$

10. $98 - 30 =$ _____

11. $78 - 17 =$ _____

12. $58 - 43 =$ _____

13. $45 - 29 =$ _____

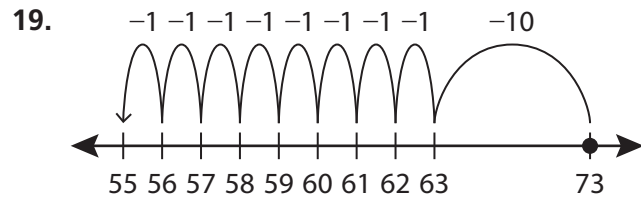
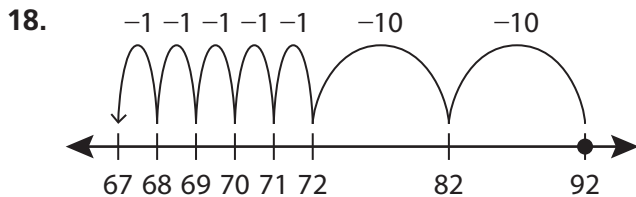
14. $62 - 53 =$ _____

15. $84 - 76 =$ _____

16. $91 - 4 =$ _____

17. $23 - 6 =$ _____

Write the equation shown by the number line.



20. **TALENT SHOW** A talent show has 54 acts. 36 acts perform. How many acts still have to perform? _____

21. **CRAFT FAIR** Descartes takes 88 bracelets to a craft fair. He sells 6 bracelets the first day and 24 bracelets the second day. How many bracelets does he have left to sell?
