

# REVIEW: Subtracting within 100


Name \_\_\_\_\_

## Key Concept and Vocabulary

difference

$16 - 6 = 10$

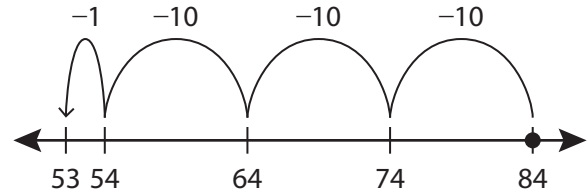
Subtract.



## Visual Model

To subtract on a number line, move to the *left*.

$$84 - 31 = 53$$



## Skill Examples

$$\begin{array}{r} 1. \quad 48 \\ - 13 \\ \hline 35 \end{array}$$

$$\begin{array}{r} 2. \quad 810 \\ \cancel{8} \cancel{0} \\ - 25 \\ \hline 65 \end{array}$$

$$\begin{array}{r} 3. \quad 514 \\ \cancel{5} \cancel{1} \\ - 38 \\ \hline 26 \end{array}$$

$$\begin{array}{r} 4. \quad 612 \\ \cancel{6} \cancel{1} \\ - 9 \\ \hline 63 \end{array}$$

## Application Example

5. A water park has 22 water slides. You ride 16 of the slides. How many water slides do you have left to ride?

$$\begin{array}{r} 112 \\ \cancel{1} \cancel{1} \\ - 16 \\ \hline 6 \end{array}$$

••• You have 6 water slides left to ride.

## PRACTICE MAKES PURR-FECT®



Check your answers at [BigIdeasMath.com](http://BigIdeasMath.com).

Find the difference.

$$\begin{array}{r} 6. \quad 54 \\ - 12 \\ \hline 42 \end{array}$$

$$\begin{array}{r} 7. \quad 85 \\ - 36 \\ \hline 49 \end{array}$$

$$\begin{array}{r} 8. \quad 73 \\ - 49 \\ \hline 24 \end{array}$$

$$\begin{array}{r} 9. \quad 61 \\ - 27 \\ \hline 34 \end{array}$$

10.  $98 - 30 = \underline{68}$

11.  $78 - 17 = \underline{61}$

12.  $58 - 43 = \underline{15}$

13.  $45 - 29 = \underline{16}$

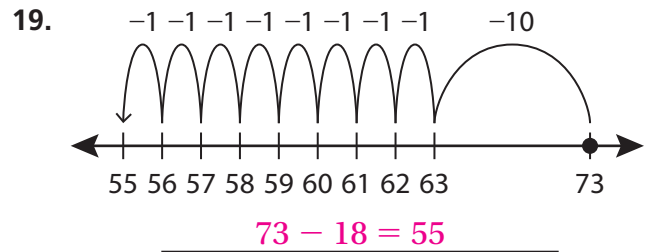
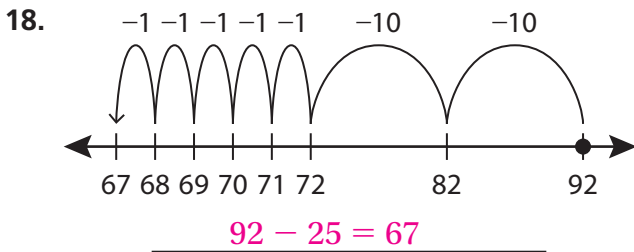
14.  $62 - 53 = \underline{9}$

15.  $84 - 76 = \underline{8}$

16.  $91 - 4 = \underline{87}$

17.  $23 - 6 = \underline{17}$

Write the equation shown by the number line.



20. **TALENT SHOW** A talent show has 54 acts. 36 acts perform. How many acts still have to perform? 18 acts

21. **CRAFT FAIR** Descartes takes 88 bracelets to a craft fair. He sells 6 bracelets the first day and 24 bracelets the second day. How many bracelets does he have left to sell? 58 bracelets