

# 6.6 Inverse of a Function



TEXAS ESSENTIAL  
KNOWLEDGE AND SKILLS

2A.2.B  
2A.2.C  
2A.2.D  
2A.7.I

## MAKING MATHEMATICAL ARGUMENTS

To be proficient in math, you need to reason inductively and make a plausible argument.

**Essential Question** How can you sketch the graph of the inverse of a function?

### EXPLORATION 1 Graphing Functions and Their Inverses

**Work with a partner.** Each pair of functions are *inverses* of each other. Use a graphing calculator to graph  $f$  and  $g$  in the same viewing window. What do you notice about the graphs?

a.  $f(x) = 4x + 3$   
 $g(x) = \frac{x - 3}{4}$

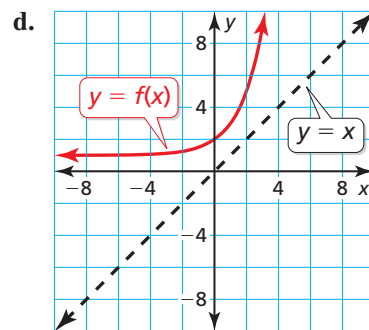
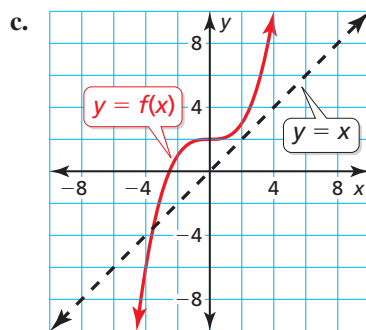
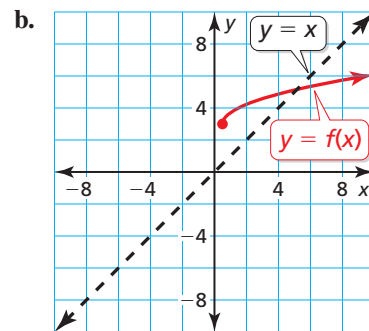
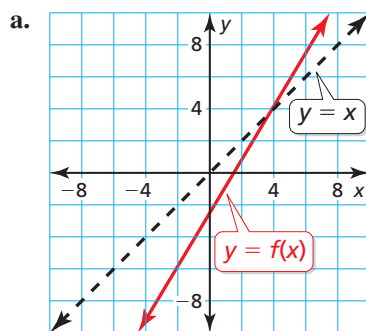
b.  $f(x) = x^3 + 1$   
 $g(x) = \sqrt[3]{x - 1}$

c.  $f(x) = \sqrt{x - 3}$   
 $g(x) = x^2 + 3, x \geq 0$

d.  $f(x) = \frac{4x + 4}{x + 5}$   
 $g(x) = \frac{4 - 5x}{x - 4}$

### EXPLORATION 2 Sketching Graphs of Inverse Functions

**Work with a partner.** Use the graph of  $f$  to sketch the graph of  $g$ , the inverse function of  $f$ , on the same set of coordinate axes. Explain your reasoning.



## Communicate Your Answer

- How can you sketch the graph of the inverse of a function?
- In Exploration 1, what do you notice about the relationship between the equations of  $f$  and  $g$ ? Use your answer to find  $g$ , the inverse function of

$$f(x) = 2x - 3.$$

Use a graph to check your answer.

## 6.6 Lesson

### Core Vocabulary

inverse functions, p. 329

#### Previous

input  
output  
inverse operations  
reflection  
line of reflection

## What You Will Learn

- ▶ Explore inverses of functions.
- ▶ Find and verify inverses of nonlinear functions.

## Exploring Inverses of Functions

You have used given inputs to find corresponding outputs of  $y = f(x)$  for various types of functions. You have also used given outputs to find corresponding inputs. Now you will solve equations of the form  $y = f(x)$  for  $x$  to obtain a general formula for finding the input given a specific output of a function  $f$ .

### EXAMPLE 1 Writing a Formula for the Input of a Function

Let  $f(x) = 2x + 3$ .

- Solve  $y = f(x)$  for  $x$ .
- Find the input when the output is  $-7$ .

#### SOLUTION

a.  $y = 2x + 3$       Set  $y$  equal to  $f(x)$ .  
 $y - 3 = 2x$       Subtract 3 from each side.  
 $\frac{y - 3}{2} = x$       Divide each side by 2.

- b. Find the input when  $y = -7$ .

$$\begin{aligned}x &= \frac{-7 - 3}{2} && \text{Substitute } -7 \text{ for } y. \\ &= \frac{-10}{2} && \text{Subtract.} \\ &= -5 && \text{Divide.}\end{aligned}$$

- ▶ So, the input is  $-5$  when the output is  $-7$ .

#### Check

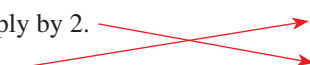

$$\begin{aligned}f(-5) &= 2(-5) + 3 \\ &= -10 + 3 \\ &= -7 \quad \checkmark\end{aligned}$$

## Monitoring Progress Help in English and Spanish at [BigIdeasMath.com](http://BigIdeasMath.com)

Solve  $y = f(x)$  for  $x$ . Then find the input(s) when the output is 2.

- $f(x) = x - 2$
- $f(x) = 2x^2$
- $f(x) = -x^3 + 3$

In Example 1, notice the steps involved after substituting for  $x$  in  $y = 2x + 3$  and after substituting for  $y$  in  $x = \frac{y - 3}{2}$ .

$y = 2x + 3$		$x = \frac{y - 3}{2}$
<b>Step 1</b> Multiply by 2.		<b>Step 1</b> Subtract 3.
<b>Step 2</b> Add 3.		<b>Step 2</b> Divide by 2.

inverse operations  
in the reverse order

## UNDERSTANDING MATHEMATICAL TERMS

The term *inverse functions* does not refer to a new type of function. Rather, it describes any pair of functions that are inverses.

## READING

The symbol  $-1$  in  $f^{-1}$  is not to be interpreted as an exponent. In other words,  $f^{-1}(x) \neq \frac{1}{f(x)}$ .

Notice that these steps *undo* each other. Functions that undo each other are called **inverse functions**. In Example 1, you can use the equation solved for  $x$  to write the inverse of  $f$  by switching the roles of  $x$  and  $y$ .

$$f(x) = 2x + 3 \quad \text{original function} \qquad g(x) = \frac{x - 3}{2} \quad \text{inverse function}$$

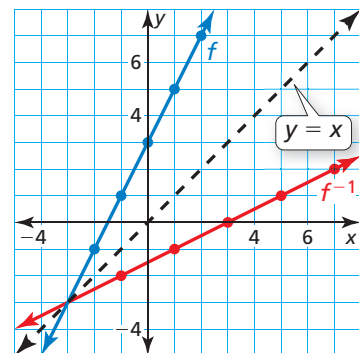
The function  $g$  is denoted by  $f^{-1}$ , read as “ $f$  inverse.” Because inverse functions interchange the input and output values of the original function, the domain and range are also interchanged.

**Original function:**  $f(x) = 2x + 3$

$x$	-2	-1	0	1	2
$y$	-1	1	3	5	7

**Inverse function:**  $f^{-1}(x) = \frac{x - 3}{2}$

$x$	-1	1	3	5	7
$y$	-2	-1	0	1	2



The graph of an inverse function is a *reflection* of the graph of the original function. The *line of reflection* is  $y = x$ . To find the inverse of a function algebraically, switch the roles of  $x$  and  $y$ , and then solve for  $y$ .

## EXAMPLE 2 Finding the Inverse of a Linear Function

Find the inverse of  $f(x) = 3x - 1$ .

### SOLUTION

**Method 1** Use inverse operations in the reverse order.

$$f(x) = 3x - 1 \quad \text{Multiply the input } x \text{ by 3 and then subtract 1.}$$

To find the inverse, apply inverse operations in the reverse order.

$$f^{-1}(x) = \frac{x + 1}{3} \quad \text{Add 1 to the input } x \text{ and then divide by 3.}$$

▶ The inverse of  $f$  is  $f^{-1}(x) = \frac{x + 1}{3}$ , or  $f^{-1}(x) = \frac{1}{3}x + \frac{1}{3}$ .

**Method 2** Set  $y$  equal to  $f(x)$ . Switch the roles of  $x$  and  $y$  and solve for  $y$ .

$$y = 3x - 1 \quad \text{Set } y \text{ equal to } f(x).$$

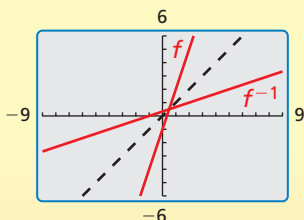
$$x = 3y - 1 \quad \text{Switch } x \text{ and } y.$$

$$x + 1 = 3y \quad \text{Add 1 to each side.}$$

$$\frac{x + 1}{3} = y \quad \text{Divide each side by 3.}$$

▶ The inverse of  $f$  is  $f^{-1}(x) = \frac{x + 1}{3}$ , or  $f^{-1}(x) = \frac{1}{3}x + \frac{1}{3}$ .

### Check



The graph of  $f^{-1}$  appears to be a reflection of the graph of  $f$  in the line  $y = x$ . ✓

## Monitoring Progress Help in English and Spanish at [BigIdeasMath.com](http://BigIdeasMath.com)

Find the inverse of the function. Then graph the function and its inverse.

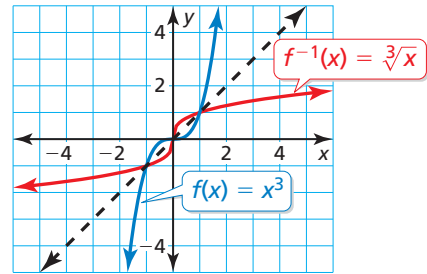
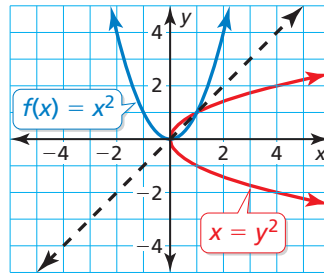
4.  $f(x) = 2x$

5.  $f(x) = -x + 1$

6.  $f(x) = \frac{1}{3}x - 2$

## Inverses of Nonlinear Functions

In the previous examples, the inverses of the linear functions were also functions. The inverse of a function, however, is not always a function. The graphs of  $f(x) = x^2$  and  $f(x) = x^3$  are shown along with their reflections in the line  $y = x$ . Notice that the inverse of  $f(x) = x^3$  is a function, but the inverse of  $f(x) = x^2$  is *not* a function.



When the domain of  $f(x) = x^2$  is *restricted* to only nonnegative real numbers, the inverse of  $f$  is a function.

### EXAMPLE 3 Finding the Inverse of a Quadratic Function

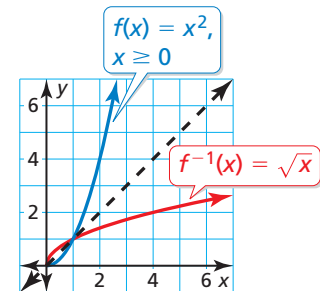
Find the inverse of  $f(x) = x^2$ ,  $x \geq 0$ . Then graph the function and its inverse.

#### SOLUTION

$f(x) = x^2$	Write the original function.
$y = x^2$	Set $y$ equal to $f(x)$ .
$x = y^2$	Switch $x$ and $y$ .
$\pm\sqrt{x} = y$	Take square root of each side.

The domain of  $f$  is restricted to nonnegative values of  $x$ . So, the range of the inverse must also be restricted to nonnegative values.

► So, the inverse of  $f$  is  $f^{-1}(x) = \sqrt{x}$ .



#### STUDY TIP

If the domain of  $f$  were restricted to  $x \leq 0$ , then the inverse would be  $f^{-1}(x) = -\sqrt{x}$ .

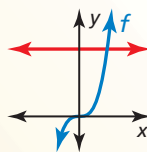
You can use the graph of a function  $f$  to determine whether the inverse of  $f$  is a function by applying the *horizontal line test*.

## Core Concept

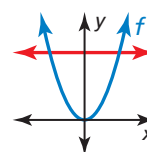
### Horizontal Line Test

The inverse of a function  $f$  is also a function if and only if no horizontal line intersects the graph of  $f$  more than once.

#### Inverse is a function



#### Inverse is not a function

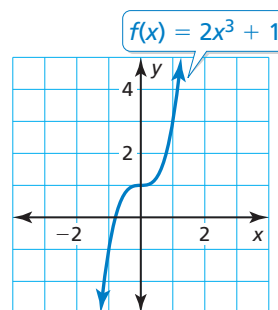


### EXAMPLE 4 Finding the Inverse of a Cubic Function

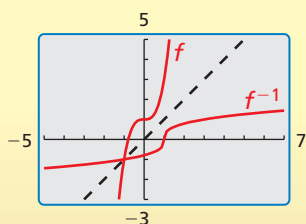
Consider the function  $f(x) = 2x^3 + 1$ . Determine whether the inverse of  $f$  is a function. Then find the inverse.

#### SOLUTION

Graph the function  $f$ . Notice that no horizontal line intersects the graph more than once. So, the inverse of  $f$  is a function. Find the inverse.



#### Check



$$y = 2x^3 + 1$$

Set  $y$  equal to  $f(x)$ .

$$x = 2y^3 + 1$$

Switch  $x$  and  $y$ .

$$x - 1 = 2y^3$$

Subtract 1 from each side.

$$\frac{x - 1}{2} = y^3$$

Divide each side by 2.

$$\sqrt[3]{\frac{x - 1}{2}} = y$$

Take cube root of each side.

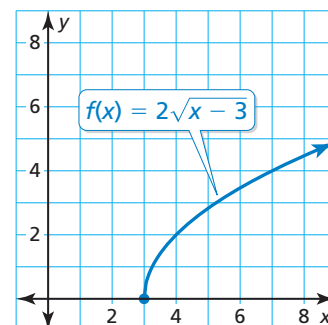
► So, the inverse of  $f$  is  $f^{-1}(x) = \sqrt[3]{\frac{x - 1}{2}}$ .

### EXAMPLE 5 Finding the Inverse of a Radical Function

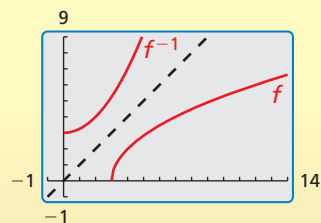
Consider the function  $f(x) = 2\sqrt{x - 3}$ . Determine whether the inverse of  $f$  is a function. Then find the inverse.

#### SOLUTION

Graph the function  $f$ . Notice that no horizontal line intersects the graph more than once. So, the inverse of  $f$  is a function. Find the inverse.



#### Check



$$y = 2\sqrt{x - 3}$$

Set  $y$  equal to  $f(x)$ .

$$x = 2\sqrt{y - 3}$$

Switch  $x$  and  $y$ .

$$x^2 = (2\sqrt{y - 3})^2$$

Square each side.

$$x^2 = 4(y - 3)$$

Simplify.

$$x^2 = 4y - 12$$

Distributive Property

$$x^2 + 12 = 4y$$

Add 12 to each side.

$$\frac{1}{4}x^2 + 3 = y$$

Divide each side by 4.

Because the range of  $f$  is  $y \geq 0$ , the domain of the inverse must be restricted to  $x \geq 0$ .

► So, the inverse of  $f$  is  $f^{-1}(x) = \frac{1}{4}x^2 + 3$ , where  $x \geq 0$ .

### Monitoring Progress Help in English and Spanish at [BigIdeasMath.com](http://BigIdeasMath.com)

Find the inverse of the function. Then graph the function and its inverse.

7.  $f(x) = -x^2, x \leq 0$

8.  $f(x) = -x^3 + 4$

9.  $f(x) = \sqrt{x + 2}$

## REASONING

Inverse functions *undo* each other. So, when you evaluate a function for a specific input, and then evaluate its inverse using the output, you obtain the original input.

Functions  $f$  and  $g$  are inverses of each other provided that

$$f(g(x)) = x \quad \text{and} \quad g(f(x)) = x.$$

The operations  $f(g(x))$  and  $g(f(x))$  are *compositions* of functions.

### EXAMPLE 6 Determining Whether Functions Are Inverses

Determine whether  $f(x) = 3x - 1$  and  $g(x) = \frac{x+1}{3}$  are inverse functions.

#### SOLUTION

**Step 1** Determine whether  $f(g(x)) = x$ .

$$\begin{aligned} f(g(x)) &= f\left(\frac{x+1}{3}\right) \\ &= 3\left(\frac{x+1}{3}\right) - 1 \\ &= x + 1 - 1 \\ &= x \end{aligned}$$

**Step 2** Determine whether  $g(f(x)) = x$ .

$$\begin{aligned} g(f(x)) &= g(3x - 1) \\ &= \frac{3x - 1 + 1}{3} \\ &= \frac{3x}{3} \\ &= x \end{aligned}$$

► So,  $f$  and  $g$  are inverse functions.

In many real-life problems, formulas contain meaningful variables, such as the radius  $r$  in the formula for the surface area  $S$  of a sphere,  $S = 4\pi r^2$ . In this situation, switching the variables to find the inverse would create confusion by switching the meanings of  $S$  and  $r$ . So, when finding the inverse, solve for  $r$  without switching the variables.

### EXAMPLE 7 Solving a Multi-Step Problem

Find the inverse of the function that represents the surface area of a sphere,  $S = 4\pi r^2$ . Then find the radius of a sphere that has a surface area of  $100\pi$  square feet.

#### SOLUTION

**Step 1** Find the inverse of the function.

$$S = 4\pi r^2$$

$$\frac{S}{4\pi} = r^2$$

The radius  $r$  must be positive, so disregard the negative square root.

$$\sqrt{\frac{S}{4\pi}} = r$$

**Step 2** Evaluate the inverse when

$$S = 100\pi.$$

$$r = \sqrt{\frac{100\pi}{4\pi}}$$

$$= \sqrt{25} = 5$$

► The radius of the sphere is 5 feet.

## Monitoring Progress Help in English and Spanish at [BigIdeasMath.com](http://BigIdeasMath.com)

Determine whether the functions are inverse functions.

10.  $f(x) = x + 5$ ,  $g(x) = x - 5$

11.  $f(x) = 8x^3$ ,  $g(x) = \sqrt[3]{2x}$

12. The distance  $d$  (in meters) that a dropped object falls in  $t$  seconds on Earth is represented by  $d = 4.9t^2$ . Find the inverse of the function. How long does it take an object to fall 50 meters?

# 6.6 Exercises

## Vocabulary and Core Concept Check

- VOCABULARY** In your own words, state the definition of inverse functions.
- WRITING** Explain how to determine whether the inverse of a function is also a function.
- COMPLETE THE SENTENCE** Functions  $f$  and  $g$  are inverses of each other provided that  $f(g(x)) = \underline{\hspace{2cm}}$  and  $g(f(x)) = \underline{\hspace{2cm}}$ .
- DIFFERENT WORDS, SAME QUESTION** Which is different? Find “both” answers.

Let  $f(x) = 5x - 2$ . Solve  $y = f(x)$  for  $x$  and then switch the roles of  $x$  and  $y$ .

Write an equation that represents a reflection of the graph of  $f(x) = 5x - 2$  in the  $x$ -axis.

Write an equation that represents a reflection of the graph of  $f(x) = 5x - 2$  in the line  $y = x$ .

Find the inverse of  $f(x) = 5x - 2$ .

## Monitoring Progress and Modeling with Mathematics

In Exercises 5–12, solve  $y = f(x)$  for  $x$ . Then find the input(s) when the output is  $-3$ . (See Example 1.)

- |                              |                               |
|------------------------------|-------------------------------|
| 5. $f(x) = 3x + 5$           | 6. $f(x) = -7x - 2$           |
| 7. $f(x) = \frac{1}{2}x - 3$ | 8. $f(x) = -\frac{2}{3}x + 1$ |
| 9. $f(x) = 3x^3$             | 10. $f(x) = 2x^4 - 5$         |
| 11. $f(x) = (x - 2)^2 - 7$   |                               |
| 12. $f(x) = (x - 5)^3 - 1$   |                               |

In Exercises 13–20, find the inverse of the function. Then graph the function and its inverse. (See Example 2.)

- |   |  |
|---|--|
| 13. $f(x) = 6x$                         | 14. $f(x) = -3x$                         |
| 15. $f(x) = -2x + 5$                    | 16. $f(x) = 6x - 3$                      |
| 17. $f(x) = -\frac{1}{2}x + 4$          | 18. $f(x) = \frac{1}{3}x - 1$            |
| 19. $f(x) = \frac{2}{3}x - \frac{1}{3}$ | 20. $f(x) = -\frac{4}{5}x + \frac{1}{5}$ |

21. **COMPARING METHODS** Find the inverse of the function  $f(x) = -3x + 4$  by switching the roles of  $x$  and  $y$  and solving for  $y$ . Then find the inverse of the function  $f$  by using inverse operations in the reverse order. Which method do you prefer? Explain.

22. **REASONING** Determine whether each pair of functions  $f$  and  $g$  are inverses. Explain your reasoning.

a.

$x$	-2	-1	0	1	2
$f(x)$	-2	1	4	7	10

$x$	-2	1	4	7	10
$g(x)$	-2	-1	0	1	2

b.

$x$	2	3	4	5	6
$f(x)$	8	6	4	2	0

$x$	2	3	4	5	6
$g(x)$	-8	-6	-4	-2	0

c.


$x$	-4	-2	0	2	4
$f(x)$	2	10	18	26	34


$x$	-4	-2	0	2	4
$g(x)$	$\frac{1}{2}$	$\frac{1}{10}$	$\frac{1}{18}$	$\frac{1}{26}$	$\frac{1}{34}$

In Exercises 23–28, find the inverse of the function. Then graph the function and its inverse. (See Example 3.)

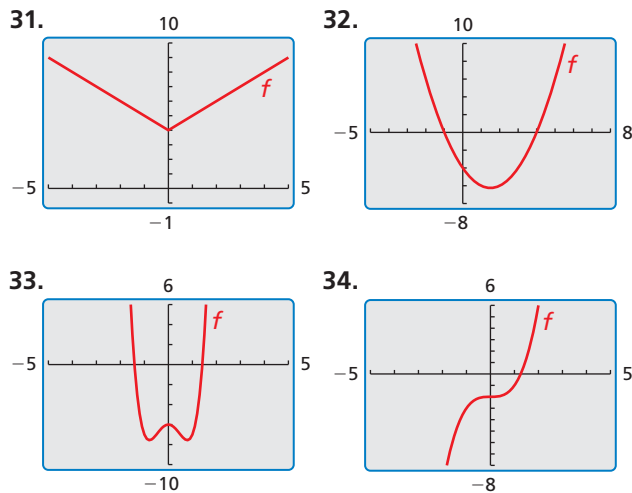
23.  $f(x) = 4x^2, x \leq 0$       24.  $f(x) = 9x^2, x \leq 0$   
 25.  $f(x) = (x - 3)^3$       26.  $f(x) = (x + 4)^3$   
 27.  $f(x) = 2x^4, x \geq 0$       28.  $f(x) = -x^6, x \geq 0$

**ERROR ANALYSIS** In Exercises 29 and 30, describe and correct the error in finding the inverse of the function.

29.   $f(x) = -x + 3$   
 $y = -x + 3$   
 $-x = y + 3$   
 $-x - 3 = y$

30.   $f(x) = \frac{1}{7}x^2, x \geq 0$   
 $y = \frac{1}{7}x^2$   
 $x = \frac{1}{7}y^2$   
 $7x = y^2$   
 $\pm \sqrt{7x} = y$

**USING TOOLS** In Exercises 31–34, use the graph to determine whether the inverse of  $f$  is a function. Explain your reasoning.



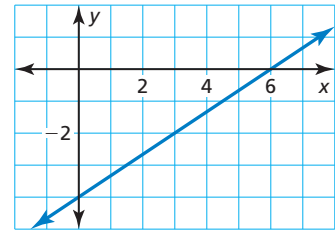
In Exercises 35–46, determine whether the inverse of  $f$  is a function. Then find the inverse. (See Examples 4 and 5.)

35.  $f(x) = x^3 - 1$       36.  $f(x) = -x^3 + 3$   
 37.  $f(x) = \sqrt{x + 4}$       38.  $f(x) = \sqrt{x - 6}$

39.  $f(x) = 2\sqrt[3]{x - 5}$       40.  $f(x) = 2x^2 - 5$   
 41.  $f(x) = x^4 + 2$       42.  $f(x) = 2x^3 - 5$   
 43.  $f(x) = 3\sqrt[3]{x + 1}$       44.  $f(x) = -3\sqrt{\frac{2x + 4}{3}}$   
 45.  $f(x) = \frac{1}{2}x^5$       46.  $f(x) = -3\sqrt{\frac{4x - 7}{3}}$

47. **WRITING EQUATIONS** What is the inverse of the function whose graph is shown?

- (A)  $g(x) = \frac{3}{2}x - 6$   
 (B)  $g(x) = \frac{3}{2}x + 6$   
 (C)  $g(x) = \frac{2}{3}x - 6$   
 (D)  $g(x) = \frac{2}{3}x + 12$



48. **WRITING EQUATIONS** What is the inverse of  $f(x) = -\frac{1}{64}x^3$ ?

- (A)  $g(x) = -4x^3$       (B)  $g(x) = 4\sqrt[3]{x}$   
 (C)  $g(x) = -4\sqrt[3]{x}$       (D)  $g(x) = \sqrt[3]{-4x}$

In Exercises 49–52, determine whether the functions are inverses. (See Example 6.)

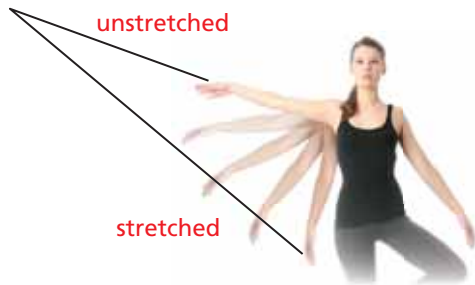
49.  $f(x) = 2x - 9, g(x) = \frac{x}{2} + 9$   
 50.  $f(x) = \frac{x - 3}{4}, g(x) = 4x + 3$   
 51.  $f(x) = \sqrt[5]{\frac{x + 9}{5}}, g(x) = 5x^5 - 9$   
 52.  $f(x) = 7x^{3/2} - 4, g(x) = \left(\frac{x + 4}{7}\right)^{3/2}$

53. **MODELING WITH MATHEMATICS** The maximum hull speed  $v$  (in knots) of a boat with a displacement hull can be approximated by  $v = 1.34\sqrt{\ell}$ , where  $\ell$  is the waterline length (in feet) of the boat. Find the inverse function. What waterline length is needed to achieve a maximum speed of 7.5 knots? (See Example 7.)



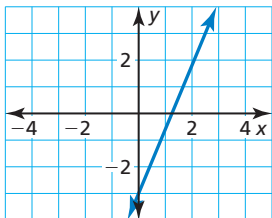


54. **MODELING WITH MATHEMATICS** Elastic bands can be used for exercising to provide a range of resistance. The resistance  $R$  (in pounds) of a band can be modeled by  $R = \frac{3}{8}L - 5$ , where  $L$  is the total length (in inches) of the stretched band. Find the inverse function. What length of the stretched band provides 19 pounds of resistance?

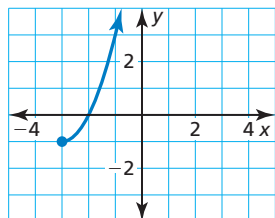


**ANALYZING RELATIONSHIPS** In Exercises 55–58, match the graph of the function with the graph of its inverse.

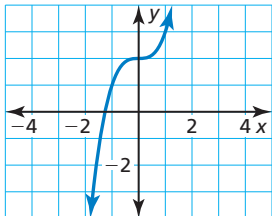
55.



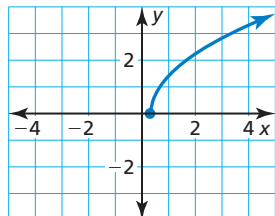
56.



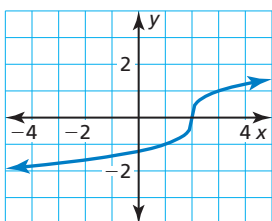
57.



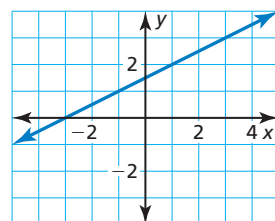
58.



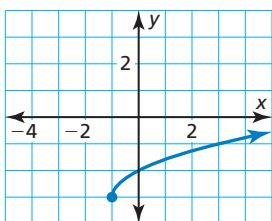
A.



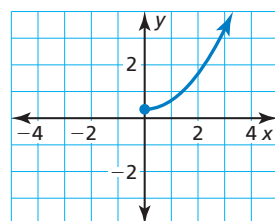
B.



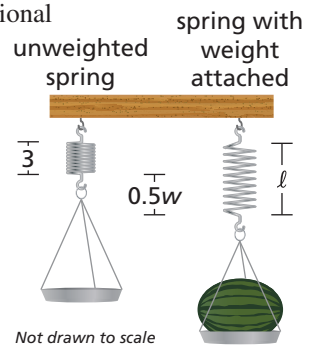
C.



D.



59. **REASONING** You and a friend are playing a number-guessing game. You ask your friend to think of a positive number, square the number, multiply the result by 2, and then add 3. Your friend's final answer is 53. What was the original number chosen? Justify your answer.
60. **MAKING AN ARGUMENT** Your friend claims that every quadratic function whose domain is restricted to nonnegative values has an inverse function. Is your friend correct? Explain your reasoning.
61. **PROBLEM SOLVING** When calibrating a spring scale, you need to know how far the spring stretches for various weights. Hooke's Law states that the length a spring stretches is proportional to the weight attached to it. A model for one scale is  $\ell = 0.5w + 3$ , where  $\ell$  is the total length (in inches) of the stretched spring and  $w$  is the weight (in pounds) of the object.



- Find the inverse function. Describe what it represents.
- You place a melon on the scale, and the spring stretches to a total length of 5.5 inches. Determine the weight of the melon.
- Verify that the function  $\ell = 0.5w + 3$  and the inverse model in part (a) are inverse functions.

62. **THOUGHT PROVOKING** Do functions of the form  $y = x^{m/n}$ , where  $m$  and  $n$  are positive integers, have inverse functions? Justify your answer with examples.

63. **PROBLEM SOLVING** At the start of a dog sled race in Anchorage, Alaska, the temperature was  $5^\circ\text{C}$ . By the end of the race, the temperature was  $-10^\circ\text{C}$ . The formula for converting temperatures from degrees Fahrenheit  $F$  to degrees Celsius  $C$  is  $C = \frac{5}{9}(F - 32)$ .

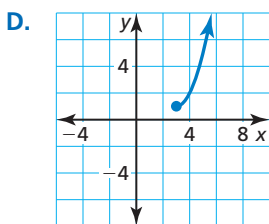
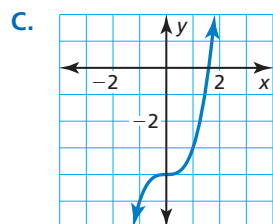
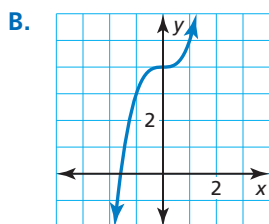
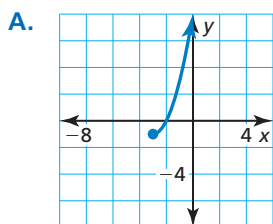


- Find the inverse function. Describe what it represents.
- Find the Fahrenheit temperatures at the start and end of the race.
- Use a graphing calculator to graph the original function and its inverse. Find the temperature that is the same on both temperature scales.

64. **PROBLEM SOLVING** The surface area  $A$  (in square meters) of a person with a mass of 60 kilograms can be approximated by  $A = 0.2195h^{0.3964}$ , where  $h$  is the height (in centimeters) of the person.
- Find the inverse function. Then estimate the height of a 60-kilogram person who has a body surface area of 1.6 square meters.
  - Verify that function  $A$  and the inverse model in part (a) are inverse functions.

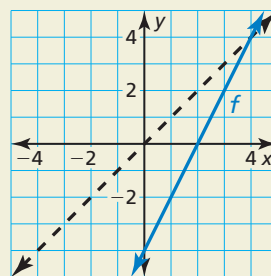
**USING STRUCTURE** In Exercises 65–68, match the function with the graph of its inverse.

- $f(x) = \sqrt[3]{x} - 4$
- $f(x) = \sqrt[3]{x} + 4$
- $f(x) = \sqrt{x+1} - 3$
- $f(x) = \sqrt{x-1} + 3$



69. **DRAWING CONCLUSIONS** Determine whether the statement is *true* or *false*. Explain your reasoning.
- If  $f(x) = x^n$  and  $n$  is a positive even integer, then the inverse of  $f$  is a function.
  - If  $f(x) = x^n$  and  $n$  is a positive odd integer, then the inverse of  $f$  is a function.

70. **HOW DO YOU SEE IT?** The graph of the function  $f$  is shown. Name three points that lie on the graph of the inverse of  $f$ . Explain your reasoning.



71. **ABSTRACT REASONING** Show that the inverse of any linear function  $f(x) = mx + b$ , where  $m \neq 0$ , is also a linear function. Identify the slope and  $y$ -intercept of the graph of the inverse function in terms of  $m$  and  $b$ .
72. **CRITICAL THINKING** Consider the function  $f(x) = -x$ .
- Graph  $f(x) = -x$  and explain why it is its own inverse. Also, verify that  $f(x) = -x$  is its own inverse algebraically.
  - Graph other linear functions that are their own inverses. Write equations of the lines you graphed.
  - Use your results from part (b) to write a general equation describing the family of linear functions that are their own inverses.

## Maintaining Mathematical Proficiency

Reviewing what you learned in previous grades and lessons

Simplify the expression. Write your answer using only positive exponents. (*Skills Review Handbook*)

73.  $(-3)^{-3}$

74.  $2^3 \cdot 2^2$

75.  $\frac{4^5}{4^3}$

76.  $\left(\frac{2}{3}\right)^4$

Describe the  $x$ -values for which the function is increasing, decreasing, positive, and negative. (*Section 5.1*)

