


Name _____

Lesson
12.1 **Extra Practice**

Write the name of the coin.














Write the value of the coin. Use the cent sign.



Value: _____



Value: _____



Value: _____

10. Your friend says the coins are in order of value from greatest to least. Is your friend correct? Explain.



11. You have a quarter. Do you have enough money to buy the pen?

Yes

No



12. A sticker costs 35 cents. You have the coins shown. Do you have enough money to buy the sticker?



Yes

No

Name _____

Lesson
12.2 **Extra Practice**

Count on to find the total value.



_____, _____, _____, _____, _____, _____


Total value: _____



_____, _____, _____, _____, _____

Total value: _____

Find the total value of each group of coins. Then circle the group of coins that has the greater total value.



Total value: _____



Total value: _____



Total value: _____



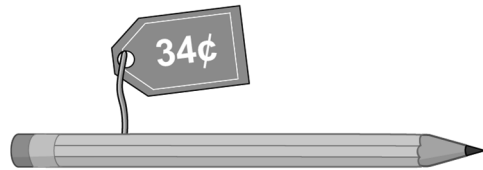
Total value: _____

5. Your friend has 8 dimes. You have 3 quarters. Who has more money?

You

Friend

6. You have 6 nickels. Can you buy the pencil? Explain.



7. You have a group of different types of coins. The total value of the group of coins is 19¢. What coins could you have?



Name _____

Lesson
12.3 **Extra Practice**

Write the time shown by the hour hand.

1.



_____ o'clock

2.



_____ o'clock

3.



_____ o'clock

4.



_____ o'clock

5.



_____ o'clock


6.




_____ o'clock

Draw the hour hand to show the time.


7. 1 o'clock



8. 10 o'clock



9. 3 o'clock



10. You go to soccer practice at 5 o'clock. Which clock shows the time you go to soccer practice?




-
11. Your friend goes to bed 1 hour later than you. Show and write the time your friend goes to bed.

You



Friend




_____ o'clock

-
12. Newton goes to his piano lesson 1 hour earlier than Descartes. Show and write the time Newton goes to his piano lesson.

Descartes



Newton



_____ o'clock

Name _____

Lesson
12.4 **Extra Practice**

Write the time shown by the hour hand.

1.



half past _____

2.



half past _____

3.



half past _____

4.



half past _____

5.



half past _____


6.




half past _____

Draw the hour hand to show the time.


7. half past 1



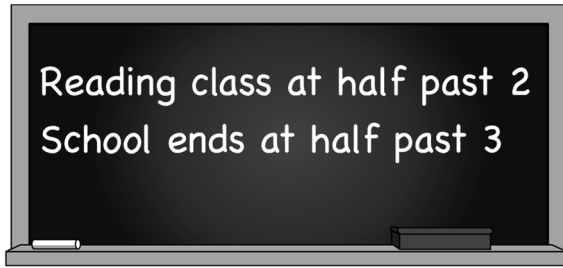
8. half past 3



9. 11 o'clock



10. Is it time for reading class or the end of school?



Reading class

School ends


11. Your art class lasts a half hour. Show and circle the time your art class ends.

Start



half past 11

End



half past 12

12 o'clock


12. Your dance lesson lasts a half hour. Show and circle the time your dance lesson ends.

Start



half past 5

End



6 o'clock

7 o'clock

Name _____

Lesson
12.5 **Extra Practice**

Write the time.

1.



2.



3.



4.



5.




6.




Draw to show the time.


7. 4 o'clock



8. half past 1



9. half past 9



10. Newton shows half past 11. Is he correct? Explain.




11. You read a book for an hour. Show and write the time you stop reading.

Start



Stop




12. Your drum lesson lasts an hour. Show and write the time your drum lesson ends.

Start



End

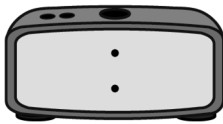


Name _____

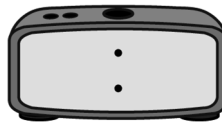
Lesson
12.6 **Extra Practice**

Show the time.

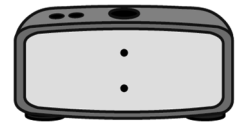
1.



2.



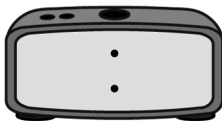
3.



4.



5.




6.




Draw to show the time.


7.



8.



9.



10. Which time does not belong with the other three?
Think: How do you know?



half past 10



-
11. Which time does not belong with the other three?
Think: How do you know?



2 o'clock




-
12. Tennis starts 1 hour later than hockey. Show and circle the time tennis starts.

Hockey



Tennis



half past 8

8 o'clock

half past 7

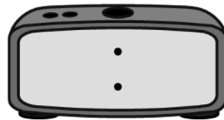
6 o'clock

Name _____

Lesson
12.7 **Extra Practice**

Write the time. Circle *a.m.* or *p.m.*

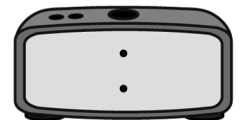
1. Football practice



a.m.

p.m.

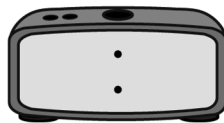
2. Nap time



a.m.

p.m.

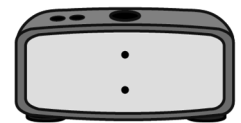
3. Sunset



a.m.

p.m.

4. Math class




a.m.

p.m.

Draw to show the time. Circle *a.m.* or *p.m.*


5. Snack before bed



a.m.

p.m.

6. Dress before school



a.m.

p.m.

7. Use the times in the list to complete the story.

You arrive at your friend's house at _____.

You then go to the park to play at _____.

You return to your friend's house to eat a snack at _____.

11:30 a.m.

1:30 p.m.

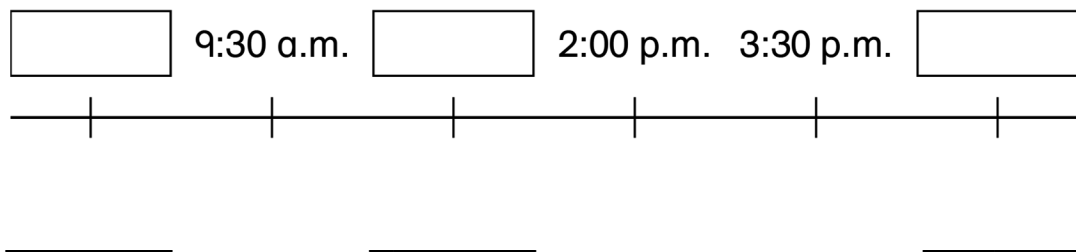
8:30 a.m.

8. Use the times to complete the timeline. Write something you might do at those times.

4:30 p.m.

7:00 a.m.

1:30 p.m.

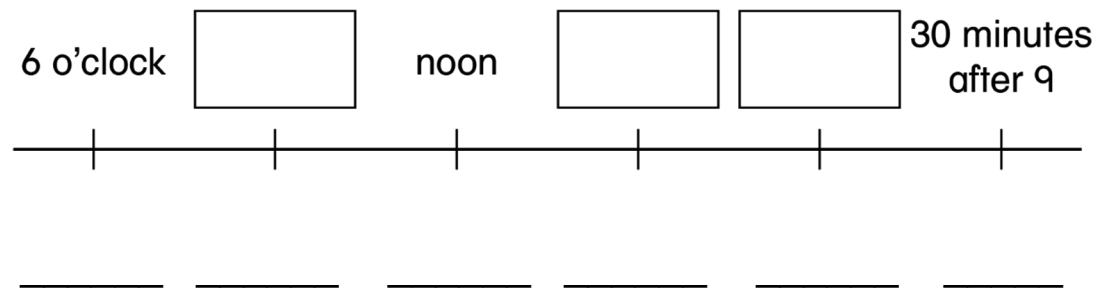


9. Use the times to complete the timeline. Then rewrite each time digitally below, including *a.m.* or *p.m.*

half past 7

30 minutes after 8

30 minutes before 11



Name _____

Lesson
12.8 **Extra Practice**

How many hours have passed from the start time to the end time?

1. Start



End



_____ hours

2. Start



End



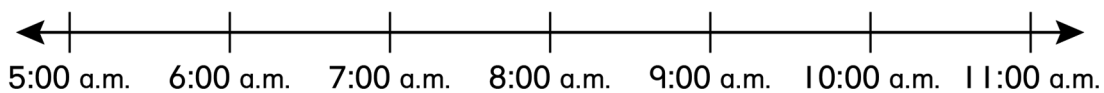
_____ hours

3. How many hours have passed from the start time to the end time?

Start

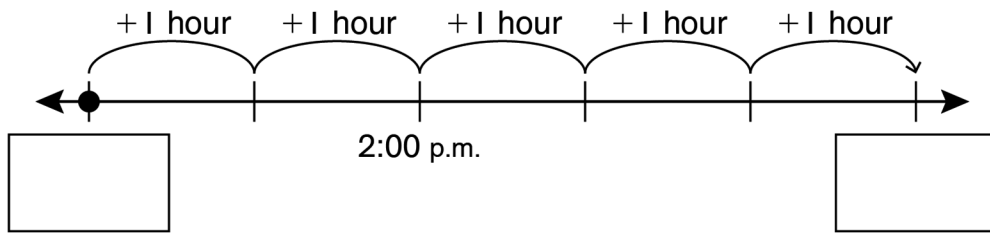


End

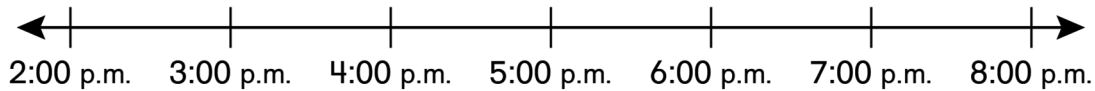


_____ hours

4. What is the start time and the end time?



5. You go to a zoo at 2:00 p.m. You stay for 5 hours. What time do you leave the zoo?



6. You are at an amusement park for 4 hours. You leave the amusement park at 7:00 p.m. What time did you arrive at the amusement park?

